

52nd INTERNATIONAL CHEMISTRY OLYMPIAD

2020

UK Round One

STUDENT QUESTION BOOKLET

* * * * *

- The time allowed is two hours.
- Attempt all six questions.
- Write your answers in the student answer booklet.
- Write only the essential steps of your calculations in the answer booklet.
- Always give the appropriate unit and number of significant figures.
- The final page of this question booklet includes a copy of the periodic table and some useful physical constants and quantities.
- Do *NOT* write anything in the right-hand margin of the answer booklet.
- The marks available for each question are shown below. These may be helpful when dividing your time between questions.

Question	1	2	3	4	5	6	Total
Marks Available	10	10	17	12	17	20	86

Some of the questions will contain material you will not be familiar with. However, you should be able to work through the problems by applying the skills you have learnt as a chemist. There are different ways to approach the tasks – even if you cannot complete certain parts of a question, you may find later parts straightforward.

1. This question is about calcium carbide

Calcium carbide (CaC_2) is a colourless solid used in the production of ethyne.

Calcium carbide is produced when calcium oxide reacts with carbon, forming calcium carbide and carbon monoxide.

The UK IChO team mascot is pictured with a calcium carbide lamp.



- (a) (i) Write an equation for the formation of calcium carbide from calcium oxide.
- (ii) Draw a dot and cross diagram of the carbide ion, C_2^{2-} .

The German chemist Friedrich Wöhler discovered that calcium carbide reacted with water releasing ethyne gas (C_2H_2) and calcium hydroxide. The ethyne was burnt in miner's lamps and the head lights of early motor vehicles for the purpose of illumination.

- (b) Write an equation for the formation of ethyne from calcium carbide.

An impure sample of calcium carbide of mass 0.752 g was added to 50.0 cm^3 of water.

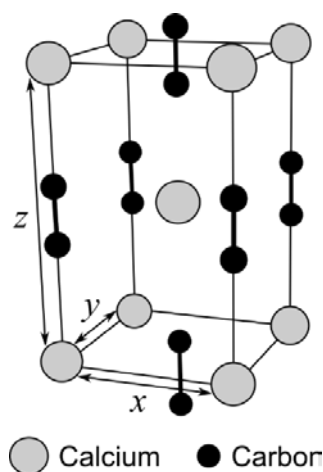
After all the calcium carbide had reacted, 20.00 cm^3 of the reaction mixture was removed and titrated against 0.250 mol dm^{-3} hydrochloric acid. 34.60 cm^3 of hydrochloric acid was required to neutralise the sample. It can be assumed that none of the impurities reacted.

- (c) Calculate the percentage purity of the calcium carbide.

The diagram shows the unit cell of calcium carbide. Calcium is positioned at the corners and centre of the unit cell.

Some of the atoms are completely contained within the boundaries of a single unit cell.

Only a fraction of atoms centred on corners, edges, or faces are contained within a single unit cell.



- (d) By considering the number of fractions of atoms within one unit cell, count the net numbers of calcium and carbon atoms within one unit cell.

The density of calcium carbide is 2.20 g cm^{-3} and the values of x and y are both 3.88 Å.

- (e) Calculate the value of z in Å.

2. This question is about hydrogen as a fuel

Carbon dioxide emissions from fossil fuels are a major factor in climate change. Hydrogen is a potential alternative to fossil fuels, providing 'clean energy' with only water as a by-product. The UK government is investigating converting the natural gas grid to carry hydrogen instead.



For this question, assume all processes take place at 298 K.

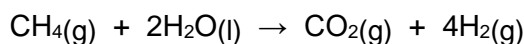
Enthalpy change of formation of $\text{CH}_4(\text{g})$, $\Delta H_f^\ominus = -74.8 \text{ kJ mol}^{-1}$

Enthalpy change of formation of $\text{CO}_2(\text{g})$, $\Delta H_f^\ominus = -393.5 \text{ kJ mol}^{-1}$

Enthalpy change of formation of $\text{H}_2\text{O}(\text{l})$, $\Delta H_f^\ominus = -285.8 \text{ kJ mol}^{-1}$

Entropy change of formation of $\text{H}_2\text{O}(\text{l})$, $\Delta S_f^\ominus = -163.0 \text{ J K}^{-1} \text{ mol}^{-1}$

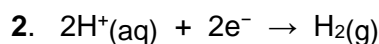
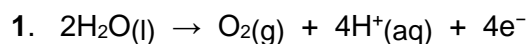
One low cost method for producing hydrogen is reforming methane. Though this produces CO_2 , this can be easily captured. The reforming process can be represented by the overall reaction:



(a) Calculate the enthalpy change for this reaction.

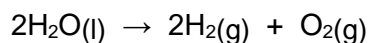
Electrolysis of water is another method of producing hydrogen. On a large scale, it currently costs more than reforming methane.

In polymer electrolyte membrane electrolysis, protons are transferred through a membrane between the two electrodes. The two half reactions are:



(b) Which of these half reactions occurs at the cathode?

The overall cell reaction is as follows:



(c) Calculate the enthalpy change for the overall cell reaction.

Given that $\Delta G^\ominus = -nFE^\ominus$ and $\Delta G^\ominus = \Delta H^\ominus - T\Delta S^\ominus$

where n = moles of electrons transferred in the overall equation, F = Faraday constant

(d) Calculate the cell potential, E^\ominus , for the overall cell reaction in V.

(if you do not get an answer to this question, use -1.13 V in further calculations)

(e) What is the standard electrode potential for half reaction 1?

To replace natural gas within appliances such as boilers or furnaces, there needs to be a similar amount of heat released per second from burning fuel.

(f) What is the standard enthalpy change of combustion of CH_4 ?

(If you do not get an answer to this question, use $-943.2 \text{ kJ mol}^{-1}$ in further calculations)

(g) What is the standard enthalpy change of combustion of H_2 ?

(If you do not get an answer to this question, use $-352.8 \text{ kJ mol}^{-1}$ in further calculations)

When fuel gases are supplied under the same pressure, the heat released per second in a burner may be expressed using:

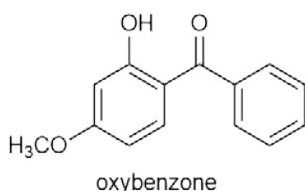
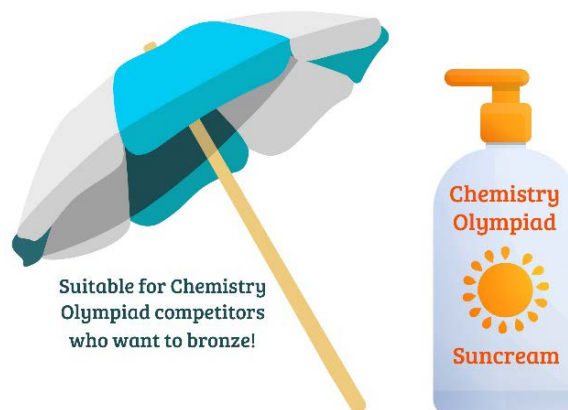
$$\text{heat released per second} \propto \frac{\text{standard enthalpy change of combustion}}{\sqrt{\text{relative molecular mass}}}$$

(h) What is the ratio of heat released per second in a burner fuelled by hydrogen compared to in the same burner fuelled by methane?

Assume hydrogen and methane are supplied under the same pressure.

3. This question is about sun cream

On 1st January, the Pacific island of Palau imposed a ban on certain sun creams to protect its coral reefs. The ban restricts the use of ten products which are toxic to marine life and are linked to the bleaching of coral. Scientists are particularly concerned with two UV light-absorbing chemicals: oxybenzone and octinoxate.



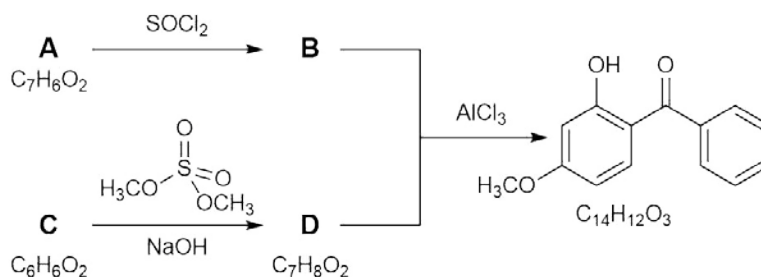
- (a) Which functional groups are present in oxybenzone? Tick the correct answer(s) in the answer booklet.

ester	aldehyde	ketone
carboxylic acid	ether	phenol

Oxybenzone is good at absorbing UV radiation due to the delocalisation of its electrons. This delocalisation of electrons is aided by an **intramolecular** hydrogen bond in oxybenzone.

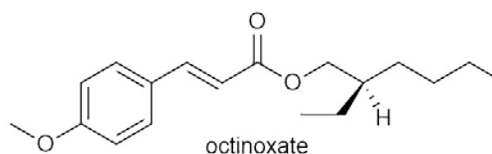
- (b) On the oxybenzone structure in the answer booklet, circle the two atoms involved in the **intramolecular** hydrogen bond.

The synthesis of oxybenzone is shown below.



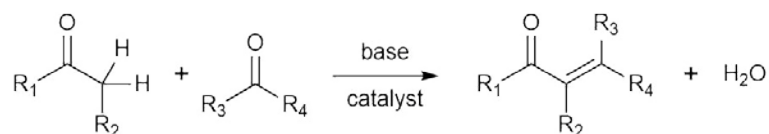
- (c) Draw the structures of compounds **A**, **B**, **C** and **D**.

Octinoxate exists as multiple stereoisomers; only one is shown. Enantiomers are stereoisomers that are non-superimposable mirror images of each other.

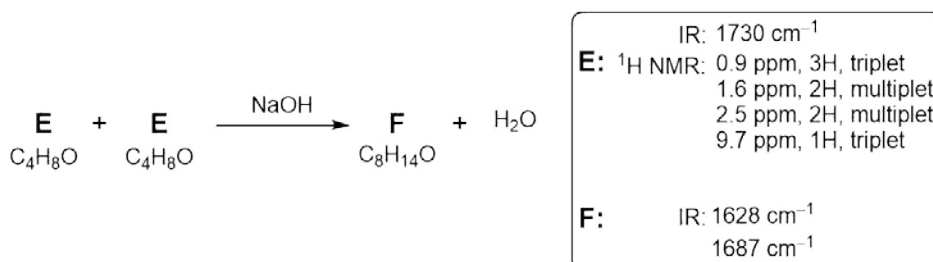


- (d) (i) Draw a second stereoisomer of octinoxate that is the enantiomer of the one shown.
- (ii) Draw a third stereoisomer of octinoxate that is not the enantiomer of the one shown.

In the synthesis of octinoxate, a base-catalysed condensation reaction between two molecules containing C=O groups is used. The product of this reaction is a molecule that contains a C=C and a C=O bond next to each other. This proximity helps to make octinoxate a good absorber of UV light.

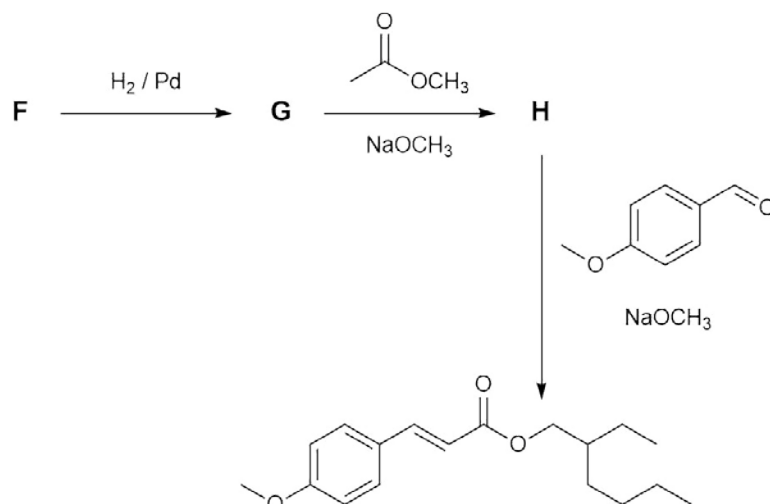


The synthesis of octinoxate begins with the conversion of two molecules of **E** to **F**.



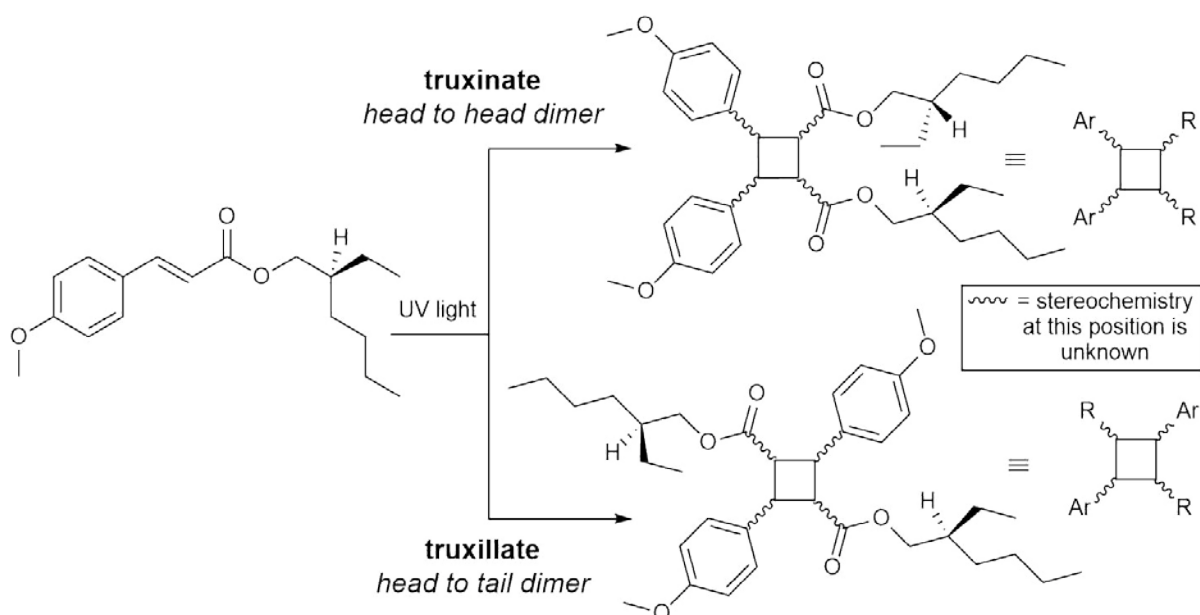
(e) Draw the structures of compounds **E** and **F**. Stereochemistry is not required.

Compound **F** is then converted into octinoxate in three steps. By-products are not shown.



(f) Draw the structures of compounds **G** and **H**. Stereochemistry is not required.

Upon exposure to UV light, octinoxate forms two types of dimers which are toxic to marine life: truxinates and truxillates. If a single stereoisomer is irradiated with UV light, many different truxinate and truxillate stereoisomers can be formed due to the position of the groups (abbreviated as R or Ar) on the newly formed cyclobutane ring.



(g) What do all the truxinate and truxillate products produced in this reaction have in common? Tick the correct answer(s) in the answer booklet.

The same molecular formula

The same melting points

Rotate plane-polarised light in the same direction

A research group separated the products formed to further understand their toxicological properties. The truxinate dimers can be categorised by the number of substituents on the same face of the cyclobutane ring (either two, three or four). This is shown with wedged and hashed bonds.

Substituents on same face	Truxinates	
Four		
Three		

(h) (i) In the answer booklet circle to indicate whether each structure has an enantiomer.

(ii) In the answer booklet, draw the structures to complete the 'Two' line(s) in the table. Indicate whether each structure has an enantiomer. For a pair of enantiomers, only draw one of the pair. Not all boxes need to be used.

4. This question is about silicon oxides

Minerals formed from silicon oxides form 90% of the earth's crust. The most common pure silicon oxide is silicon dioxide. This can be used to make silica gel, packets of which are used to keep items free of moisture.



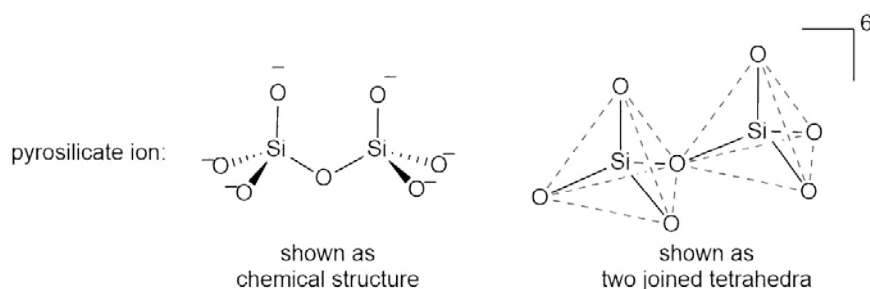
To make silica gel, solid silicon dioxide must be reacted in 1:2 ratio with sodium carbonate at 1500 °C. This reaction forms salt **X** and colourless gas **Y**. The anion of salt **X** contains only silicon and oxygen and has a tetrahedral structure.

- (a) (i) What is the formula of gas **Y**?
- (ii) Draw the structure of the anion in **X**, clearly indicating its overall charge.
- (iii) Write the equation for the reaction to form **X**.

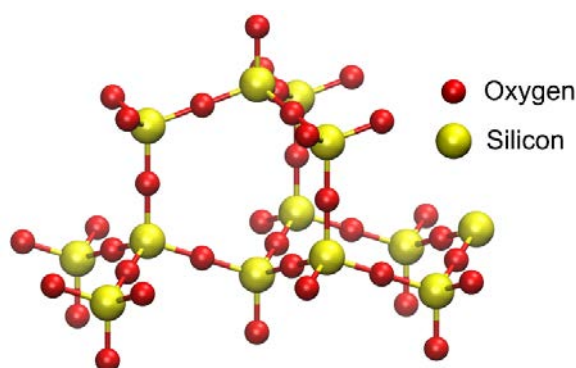
Reaction of either **X** or CaSiO_3 with dilute acids forms a gelatinous precipitate of $\text{SiO}_2 \cdot x\text{H}_2\text{O}$. This precipitate is then washed, dried, granulated and put in sachets

- (b) Write the equation of the reaction of CaSiO_3 with dilute hydrochloric acid to form $\text{SiO}_2 \cdot 11\text{H}_2\text{O}$

Silicates are anions containing only silicon and oxygen which contain only Si–O single bonds. Their structure can be described by joining silica tetrahedra. The pyrosilicate $[\text{Si}_2\text{O}_7]^{6-}$ ion found in Åkermanite ($\text{Ca}_2\text{Mg}[\text{Si}_2\text{O}_7]$) has the structure shown below.



Part of the structure of quartz is shown to the right. Note that not all bonds are shown on all atoms.



- (c) In quartz, how many other tetrahedra is each silica tetrahedron attached to?

(d) Draw the structure of the silicate anion in the following compounds. 3D shape is not required.

(i) The $[\text{Si}_3\text{O}_9]^{6-}$ ion found in Benitoite, $\text{BaTi}[\text{Si}_3\text{O}_9]$, an extremely rare blue mineral.

(ii) The mineral beryl, $\text{Be}_3\text{Al}_2[\text{Si}_6\text{O}_{18}]$. (Clearly indicate the overall charge)

Talc ($\text{Mg}_3\text{Si}_4\text{H}_2\text{O}_{12}$) is a mineral which contains hydroxide ions in addition to silicates. The hydroxide ions do not interact with the silicate, but instead coordinate to the magnesium cations. The silicate lattice is essentially a 2D sheet that is used as a solid lubricant.

(e) What is the formula and charge of the silicate anion in talc?

Another hydrated silicate mineral, chrysotile ($\text{Mg}_3\text{Si}_2\text{H}_4\text{O}_9$), forms needle-like fibres and is a form of asbestos. Talc is often found contaminated with chrysotile. A mineral sample was analysed and found to contain 20.32% Mg and 28.18% Si by mass.

(f) Assuming the sample contained only talc and chrysotile, determine the molar percentage of each it contained.

5. This question is about colourful compounds

Colourful molecules are found in leaves (β -carotene and chlorophyll), blood (haemoglobin), skin (melanin), and multivitamin supplements. They are all organic compounds with alternating single and double bonds, and we will now explore how this pattern leads to colour.



- (a) A simple molecule with alternating single and double bonds is buta-1,3-diene. Draw its skeletal structure.

Buta-1,3-diene is colourless because it does not absorb visible light. It does absorb in the UV at a wavelength, λ , of 210 nm. This absorption is caused by the electrons in the double bonds moving between different energy levels. The difference between levels is given by:

$$\Delta E = \frac{hc}{\lambda}$$

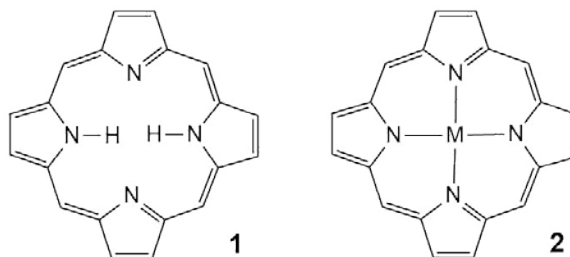
where h is the Planck constant and c is the speed of light in vacuum. ΔE is also related to the length of the molecule, L , via:

$$\Delta E = \frac{(2n + 1)h^2}{8m_e L^2}$$

where m_e is the mass of the electron and n is the number of double bonds.

- (b) (i) Calculate the energy difference, ΔE , for the UV absorption in buta-1,3-diene in J.
(ii) Using this energy difference, calculate the length, L , in Å.

Porphine (1) absorbs visible light, forming bright red crystals. Its coordination complexes with metals (2) are also coloured and found in chlorophyll and haemoglobin. It has been determined that the magnesium complex ($M = \text{Mg}$) absorbs at 571.4 nm, and the zinc complex ($M = \text{Zn}$) absorbs at 568.7 nm.



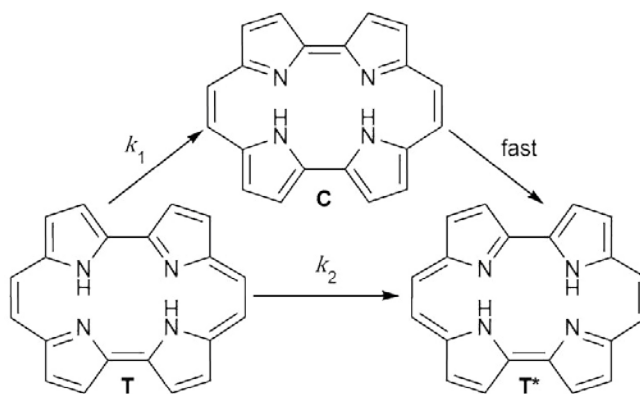
As with buta-1,3-diene, the wavelength is related to the size of the molecule, now via:

$$\lambda = \varepsilon d^2$$

where d is the distance between nitrogen atoms on opposite sides of the ring and ε is a proportionality constant which is assumed to be the same for 1 and 2. The N–Mg bond length is 2.052 Å.

- (c) (i) Calculate the proportionality constant ε in Å⁻¹ to four significant figures.
(ii) Calculate the length of the N–Zn bond in Å to four significant figures.
(iii) Calculate the absorption wavelength of porphine 1 (for which $d = 4.112$ Å) in nm to four significant figures.

Porphycene is an isomer of porphine that has attracted attention as a molecular switch. The hydrogen atoms in porphycene can “hop” across the ring, interconverting between two stable *trans*-states (**T** and **T***) that are the on/off positions of the switch. There is also an unstable *cis*-state **C**. The *trans*-states can interconvert via the *cis*-state with rate constant k_1 , or directly with rate constant k_2 .



At high temperatures $k_1 \gg k_2$ and so the direct conversion of **T** \rightarrow **T*** can be ignored. The following rate equation and kinetic data were obtained for the isomerisation.

$$k_1 = A \exp\left(-\frac{E_a}{RT}\right)$$

T / K	k_1 / s^{-1}
493	3.31×10^{12}
393	1.32×10^{12}

- (d) Under such conditions, calculate the activation energy, E_a , for **T** \rightarrow **T*** using the Arrhenius law and the above data.

The transformation is much faster at 100 K than expected from the Arrhenius law because the direct conversion of **T** \rightarrow **T*** now dominates the reaction. This is due to quantum tunnelling. The rate constant k_2 has a non-Arrhenius temperature dependence

$$k_2 = \left(\frac{2E_a}{\mu}\right)^{\frac{1}{2}} \frac{\alpha RT}{E_a} \exp\left(-\alpha\left(2 - \frac{\alpha RT}{E_a}\right)\right)$$

where μ is a scaled molar mass with units of $\text{m}^2 \text{kg mol}^{-1}$ and α is a dimensionless constant. This expression can be simplified by combining some of the terms together to form new terms β and γ .

$$k_2 = T \left(\frac{\beta}{\gamma}\right)^{\frac{1}{2}} \exp(-2\alpha + \beta T)$$

- (e) Express β and γ in terms of α , μ , E_a , and R .

The equation can be further rearranged to give

$$\ln\left(\frac{k_2}{T}\right) = \beta T + i$$

- (f) Use the following data to calculate β in K^{-1} .

(If you do not get an answer to this question, use $\beta = 9.456 \times 10^{-4} \text{K}^{-1}$ in further calculations)


T / K	k_2 / s^{-1}
83	8.74×10^{10}
61	6.23×10^{10}

The value of the constant α can be shown to be 2.235.

- (g) Calculate the activation energy E_a .

6. This question is about anammox and ladderanes

Anammox is an abbreviation for **anaerobic ammonium oxidation**. Despite being a crucial part of the nitrogen cycle, the bacteria responsible for this process were only identified as recently as 1999. In the membranes of these bacteria an unusual class of lipids were found. These lipids contained several fused cyclobutane rings. Such molecules are called ladderanes due to their resemblance to the rungs of a ladder.



The mechanism of ammonium oxidation is believed to involve several different nitrogen-containing species:

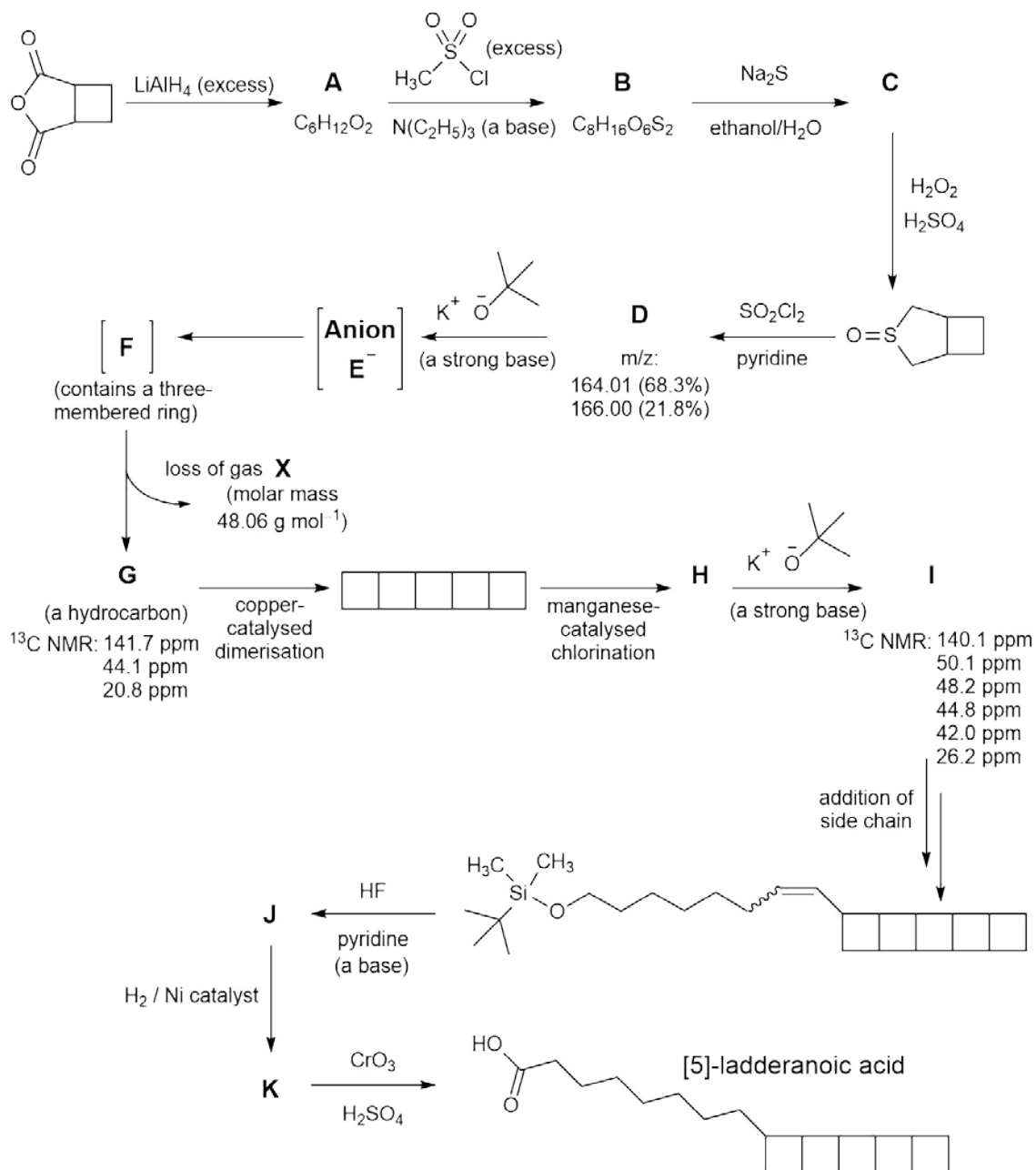
- nitrogen gas
- the ammonium ion
- the nitrite ion (NO_2^-)
- hydrazine (NH_2NH_2)
- hydroxylamine (NH_2OH).

- (a) (i) Give the oxidation state of the nitrogen atom in nitrogen gas and in the ammonium ion.
- (ii) Give the oxidation state of the nitrogen atom in the nitrite ion (NO_2^-), hydrazine (NH_2NH_2), and hydroxylamine (NH_2OH).

The reaction takes place over three steps, all of which can be assumed to take place under acidic conditions.

- (b) Using your oxidation states from part (a), write equations for the following steps in the cycle.
- (i) Step 1: The half-equation for conversion of nitrite to hydroxylamine.
- (ii) Step 2: The reaction of the ammonium ion and hydroxylamine to give hydrazine.
- (iii) Step 3: The half equation for the conversion of hydrazine to nitrogen gas.
- (c) Hence, write an overall reaction equation for the anammox process.

To further understand the lipids found in these bacteria, a research group synthesised [5]-ladderanoic acid – a key component of such lipids. The synthesis is shown below. Not all by-products are shown.



(d) Draw the structures of compounds **A** – **K** and by-product **X**. No stereochemistry is required in any structure.

Acknowledgements & References

Q1 The image is © Dr Ben Pilgrim

Q2 The image is © Shutterstock

Q3 The image is © Royal Society of Chemistry

<https://www.bbc.co.uk/news/science-environment-46046064>

<https://www.bbc.co.uk/news/world-asia-50963080>

Photolysis and cellular toxicities of the organic ultraviolet filter chemical octyl ethoxycinnamate and its photoproducts *Environ. Sci.: Processes Impacts*, **2017**, *19*, 851-860. DOI: [10.1039/C7EM00059F](https://doi.org/10.1039/C7EM00059F)

Q4 The image is © Shutterstock

Q5 The image is © Shutterstock

Theoretical Study of the Q and B Bands of Free-Base, Magnesium, and Zinc Porphyrins, and Their Derivatives *J. Phys. Chem. A* **1999**, *103*, 1894-1904. DOI: [10.1021/jp984807d](https://doi.org/10.1021/jp984807d)

Evidence for Dominant Role of Tunnelling in Condensed Phases and at High Temperatures: Double Hydrogen Transfer in Porphycenes *J. Phys. Chem. Lett.*, **2016**, *7*, 283-288. DOI: [10.1021/acs.jpcllett.5b02482](https://doi.org/10.1021/acs.jpcllett.5b02482)

Microcanonical and thermal instanton rate theory for chemical reactions at all temperatures *Faraday Discuss.*, **2016**, *195*, 49-67. DOI: [10.1039/C6FD00119J](https://doi.org/10.1039/C6FD00119J)

Q6 The image is part of an image of some 15th Century German ladders sourced from *Medieval House Book of Wolfegg Castle*, Fol. 53v-53v1/via Wikipedia (Public Domain)

Chemical Synthesis and Self-Assembly of a Ladderane Phospholipid *J. Am. Chem. Soc.*, **2016**, *138*, 15845-15848. DOI: [10.1021/jacs.6b10706](https://doi.org/10.1021/jacs.6b10706)

This work is published under the following Creative Commons License Attribution-NonCommercial-ShareAlike CC BY-NC-SA

This license lets others remix, tweak, and build upon your work non-commercially, as long as they credit you and license their new creations under the identical terms.

Authors of 2020 UK Round One Paper (listed alphabetically)

Dr Helen Alonzi (St Bartholomew's School)

Peter Bolgar (St Catharine's College, University of Cambridge)

Chloe Francis (Royal Society of Chemistry)

Mark Jordan (Royal Society of Chemistry)

Sky Kang (Up Learn)

Dr JL Kiappes (Corpus Christi College, University of Oxford)

Rob King (Royal Society of Chemistry)

Dr Ben Pilgrim (University of Nottingham)

Dr Penny Robotham (The National Mathematics and Science College)

Richard Simon (Element Energy)

Dr Andy Taylor (King Edward VI Camp Hill School for Boys)

Dr Alex Thom (Girton College, University of Cambridge)

George Trenins (St Catharine's College, University of Cambridge)

Physical Constants & Formulae

Avogadro's constant	N_A	$6.02 \times 10^{23} \text{ mol}^{-1}$
molar gas constant	R	$8.314 \text{ J K}^{-1} \text{ mol}^{-1}$
Faraday constant	F	96485 C mol^{-1}
Planck constant	h	$6.626 \times 10^{-34} \text{ m}^2 \text{ kg s}^{-1}$
speed of light in vacuum	c	$2.998 \times 10^8 \text{ m s}^{-1}$
mass of electron	m_e	$9.109 \times 10^{-31} \text{ kg}$

$$1 \text{ nm} = 1 \times 10^{-9} \text{ m}$$

$$1 \text{ \AA} = 1 \times 10^{-10} \text{ m}$$

$$0 \text{ }^\circ\text{C} = 273 \text{ K}$$

$$\Delta G^\ominus = \Delta H^\ominus - T\Delta S^\ominus$$

$$\Delta G^\ominus = -nFE^\ominus$$

1 H 1.008																	2 He 4.003
3 Li 6.94	4 Be 9.01											5 B 10.81	6 C 12.01	7 N 14.01	8 O 16.00	9 F 19.00	10 Ne 20.18
11 Na 22.99	12 Mg 24.31											13 Al 26.98	14 Si 28.09	15 P 30.97	16 S 32.06	17 Cl 35.45	18 Ar 39.95
19 K 39.102	20 Ca 40.08	21 Sc 44.96	22 Ti 47.87	23 V 50.94	24 Cr 52.00	25 Mn 54.94	26 Fe 55.85	27 Co 58.93	28 Ni 58.69	29 Cu 63.55	30 Zn 65.38	31 Ga 69.72	32 Ge 72.63	33 As 74.92	34 Se 78.97	35 Br 79.904	36 Kr 83.80
37 Rb 85.47	38 Sr 87.62	39 Y 88.91	40 Zr 91.22	41 Nb 92.91	42 Mo 95.95	43 Tc	44 Ru 101.07	45 Rh 102.91	46 Pd 106.42	47 Ag 107.87	48 Cd 112.41	49 In 114.82	50 Sn 118.71	51 Sb 121.76	52 Te 127.60	53 I 126.90	54 Xe 131.29
55 Cs 132.91	56 Ba 137.33	57 La	72 Hf 178.49	73 Ta 180.95	74 W 183.84	75 Re 186.21	76 Os 190.23	77 Ir 192.22	78 Pt 195.08	79 Au 196.97	80 Hg 200.59	81 Tl 204.38	82 Pb 207.2	83 Bi 208.98	84 Po	85 At	86 Rn
87 Fr	88 Ra	89 Ac	104 Rf	105 Db	106 Sg	107 Bh	108 Hs	109 Mt	110 Ds	111 Rg	112 Cn	113 Nh	114 Fl	115 Mc	116 Lv	117 Ts	118 Og

Lanthanides	58 Ce 140.12	59 Pr 140.91	60 Nd 144.24	61 Pm	62 Sm 150.4	63 Eu 151.96	64 Gd 157.25	65 Tb 158.93	66 Dy 162.50	67 Ho 164.93	68 Er 167.26	69 Tm 168.93	70 Yb 173.05	71 Lu 174.97
Actinides	90 Th 232.04	91 Pa 231.04	92 U 238.03	93 Np	94 Pu	95 Am	96 Cm	97 Bk	98 Cf	99 Es	100 Fm	101 Md	102 No	103 Lr