

A competition to select the team to represent the

UNITED KINGDOM

at the

**XXXVth INTERNATIONAL CHEMISTRY
OLYMPIAD**

STUDENT QUESTION BOOKLET

Round I - 2003

* * * * *

- The time allowed is 2 hours.
- Attempt all 8 questions.
- Write your answers in the special answer booklet.
- In your calculations, please write only the essential steps in the answer booklet.
- Always give the appropriate units and number of significant figures.
- You are provided with a copy of the Periodic Table.
- Do *NOT* write anything in the right hand margin of the answer booklet.

Some of the questions will contain material you will not be familiar with. However, by logically applying the skills you have learnt as a chemist, you should be able to work through the problems. There are different ways to approach the tasks – even if you cannot complete certain parts of a question, you may still find subsequent parts straightforward.

H 1 1.008																	He 2 4.003			
Li 3 6.94	Be 4 9.01	<table border="1"> <tr> <td>symbol</td> </tr> <tr> <td>atomic number</td> </tr> <tr> <td>mean atomic mass</td> </tr> </table>										symbol	atomic number	mean atomic mass	B 5 10.81	C 6 12.01	N 7 14.01	O 8 16.00	F 9 19.00	Ne 10 20.18
symbol																				
atomic number																				
mean atomic mass																				
Na 11 22.99	Mg 12 24.31											Al 13 26.98	Si 14 28.09	P 15 30.97	S 16 32.06	Cl 17 35.45	Ar 18 39.95			
K 19 39.102	Ca 20 40.08	Sc 21 44.96	Ti 22 47.90	V 23 50.94	Cr 24 52.00	Mn 25 54.94	Fe 26 55.85	Co 27 58.93	Ni 28 58.71	Cu 29 63.55	Zn 30 65.37	Ga 31 69.72	Ge 32 72.59	As 33 74.92	Se 34 78.96	Br 35 79.904	Kr 36 83.80			
Rb 37 85.47	Sr 38 87.62	Y 39 88.91	Zr 40 91.22	Nb 41 92.91	Mo 42 95.94	Tc 43	Ru 44 101.07	Rh 45 102.91	Pd 46 106.4	Ag 47 107.87	Cd 48 112.40	In 49 114.82	Sn 50 118.69	Sb 51 121.75	Te 52 127.60	I 53 126.90	Xe 54 131.30			
Cs 55 132.91	Ba 56 137.34	La* 57 138.91	Hf 72 178.49	Ta 73 180.95	W 74 183.85	Re 75 186.2	Os 76 190.2	Ir 77 192.2	Pt 78 195.09	Au 79 196.97	Hg 80 200.59	Tl 81 204.37	Pb 82 207.2	Bi 83 208.98	Po 84	At 85	Rn 86			
Fr 87	Ra 88	Ac⁺ 89																		

*Lanthanides	Ce 58 140.12	Pr 59 140.91	Nd 60 144.24	Pm 61	Sm 62 150.4	Eu 63 151.96	Gd 64 157.25	Tb 65 158.93	Dy 66 162.50	Ho 67 164.93	Er 68 167.26	Tm 69 168.93	Yb 70 173.04	Lu 71 174.97
+Actinides	Th 90 232.01	Pa 91	U 92 238.03	Np 93	Pu 94	Am 95	Cm 96	Bk 97	Cf 98	Es 99	Fm 100	Md 101	No 102	Lr 103

1. This question is about heating a cup of coffee

Nescafé have recently launched a self-heating can of coffee. To heat up the coffee, a button is pressed which mixes the heating ingredients – a very dilute solution of sodium / potassium hydroxide and calcium oxide. The can then warms up 210 ml (210 cm³) of coffee by approximately 40 °C.



- (a) Write an equation for the reaction between calcium oxide and water.
- (b) The rate of the heating may be controlled by altering the pH of the solution. How would you expect the rate of reaction to vary in acidic, basic and neutral conditions?
[Your answer should simply be the words 'acidic', 'basic' and 'neutral' in the order in which they affect the rate of reaction, fastest first.]
- (c) Given the standard enthalpies of formation of calcium hydroxide, calcium oxide and water are -1003 , -635 and -286 kJ mol⁻¹ respectively, calculate the standard molar enthalpy change for the reaction in (a).
- (d) Assuming that the heat capacity for the coffee is the same as that of water, 4.18 J K⁻¹ g⁻¹, calculate the energy needed to warm 210 ml of coffee by 40 °C.
- (e) Hence calculate the minimum mass of calcium oxide needed in the can to function as specified.

2. This question is about Reinecke's salt

When ammonium dichromate(VI) is added gradually to molten ammonium thiocyanate, Reinecke's salt is formed. It has the formula $\text{NH}_4[\text{Cr}(\text{SCN})_x(\text{NH}_3)_y]$ and the following composition by mass:

Cr	15.5 %
S	38.15 %
N	29.2 %.

- (a) Calculate the values of x and y in the above formula.
- (b) Calculate the oxidation number of chromium in the complex.
- (c) Suggest a shape for the complex anion.
- (d) Draw two possible structures for the anion and state the type of isomerism it exhibits.

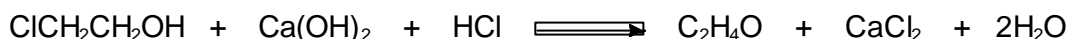

3. This question is about Green Chemistry

Increasing concerns over the use and generation of hazardous substances in chemical processes has encouraged some chemists to look for more environmentally friendly ways to make chemical products. To help evaluate a process environmentally, chemists often use the term 'percentage atom economy', where

$$\% \text{ Atom Economy} = \frac{\text{RMM of desired product}}{\text{RMM of all products}} \times 100$$



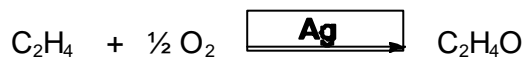
An environmentally friendly chemical process would normally be expected to have a high % atom economy, indicating that a high proportion of the starting materials end up as part of the final product, hence reducing the amount of waste. Efforts are constantly being made to increase the % atom economy of chemical processes. As an example, the manufacture of ethene oxide ($\text{C}_2\text{H}_4\text{O}$) for many years was via the classical chlorohydrin route:



(a) i) Write a balanced equation for the overall reaction.

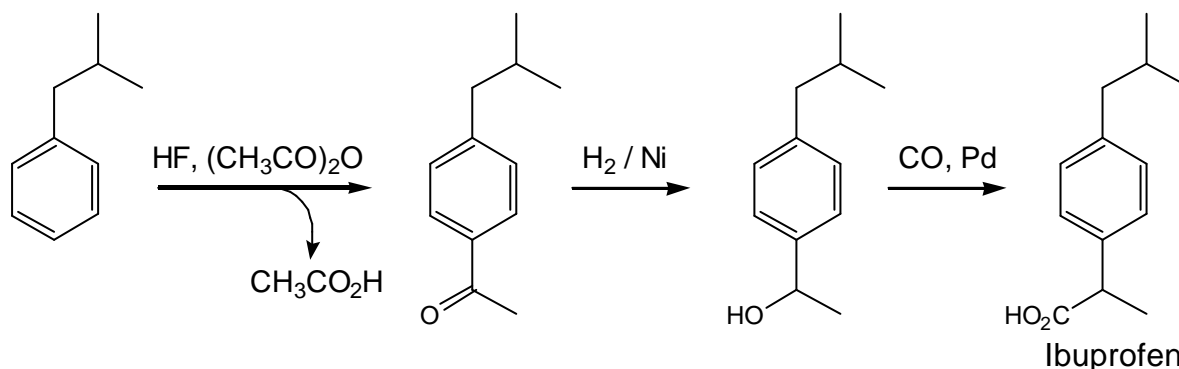
ii) Calculate the % atom economy for this process.

The modern petrochemical route involves the following reaction:



(b) Calculate the % atom efficiency of this process.

Ibuprofen, a non-steroidal anti-inflammatory drug, was first synthesised by Boots using a six-step process, with a % atom economy of 40%. When the patent expired in the 1980's, several companies began developing new methods for the preparation of ibuprofen. The BHC Company synthesis, which proved highly successful, is shown below:



Step 1 involves the use of ethanoic anhydride, $(\text{CH}_3\text{CO})_2\text{O}$.

(c) i) Calculate the % atom economy of the BHC Company process.

ii) State the purpose of the HF in step 1.

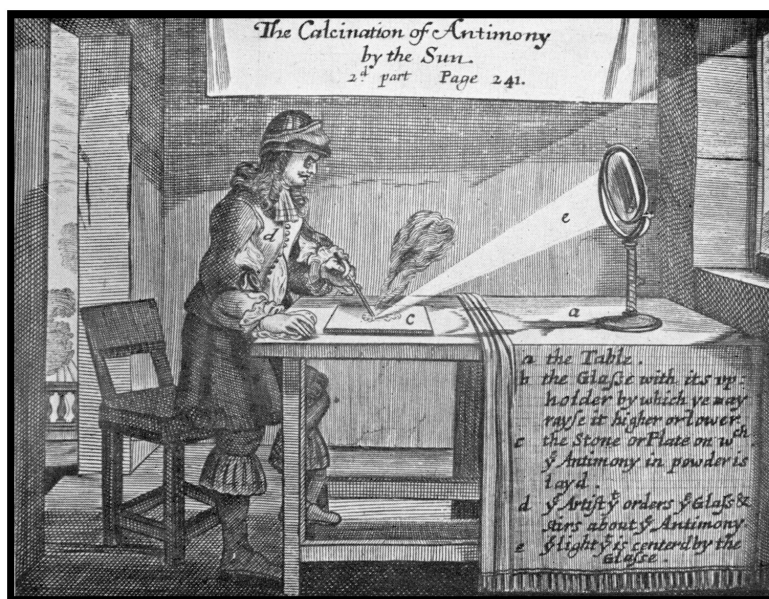
iii) What happens to the % atom economy if the ethanoic acid is reused?

4. This question is about redox equations

By considering the relevant half equations, write balanced equations for the following chemical reactions:

- (a) zinc metal decolourizing copper(II) sulfate solution
- (b) chlorine water turning sodium bromide solution orange
- (c) magnesium ribbon reacting with dilute hydrochloric acid
- (d) manganese(IV) oxide reacting with concentrated hydrochloric acid to produce a yellow-green gas and a solution of manganese(II) chloride
- (e) sodium sulfite(IV) (sulfite) decolourizing an acidified solution of potassium manganate(VII)
- (f) tin(II) chloride turning orange acidified potassium dichromate(VI) green
- (g) acidified potassium manganate(VII) reacting with a lemon-yellow solution of iron(II) ethanedioate.

5. This question is about the combining proportions of the elements



Understanding the proportions in which the elements combine was a crucial step in developing the atomic theory of matter. The picture above shows an experiment performed in the 1660s in which antimony was heated using the sun's rays to form an oxide.

In the experiment, 'ye Artist' reported that '12 *grains* of antimony increased to 15 *grains* of calx', (a *grain* is an old measure of mass). Given the crudeness of the experiment, this value is remarkably close to the theoretical yield of 14.4 '*grains*'.

(a) Calculate the formula of the oxide formed.

In another experiment published in 1673, Robert Boyle measured the increase in mass when zinc metal is heated in air. He describes the experiment thus:

We took a Drachm of filings of Zink and kept it in a Cupelling-fire about three Hours. Then it look'd as if the filings had been calcin'd. This being weigh'd in the same scales gain'd full six grains.

(b) Given that there are 60 grains in a Drachm, calculate the mass of product (in grains) that would have been produced assuming a yield of 100%.

Assuming that Boyle's measurements are accurate, only a fraction, α , of the zinc must have been converted to the oxide. (α is a fraction between 0 and 1; 0 meaning none of the zinc reacted and 1 meaning all reacted).

(c) Calculate the value of α and hence the masses of zinc oxide and unreacted zinc metal at the end of the experiment.

6. This question is about hydroxylamine and its reaction with iron(III) ions


Hydroxylamine, NH_2OH , is a base and a reducing agent; it reacts with hydrochloric acid to form the salt hydroxylammonium chloride, $\text{NH}_3\text{OH}^+\text{Cl}^-$, and with Fe^{3+} ions to produce Fe^{2+} .

1.00g of hydroxylammonium chloride was dissolved in distilled water and made up to a total volume of 250 cm^3 . A 25.0 cm^3 aliquot of this solution was added to a solution containing an excess of both iron(III) ions and sulfuric acid. The mixture was then boiled and allowed to cool. It was then titrated against a solution of $0.0200\text{ mol dm}^{-3}$ potassium manganate(VII), KMnO_4 , which oxidizes the Fe^{2+} ions back to Fe^{3+} and is itself reduced to Mn^{2+} ions; 28.9 cm^3 of the potassium manganate(VII) solution was required.

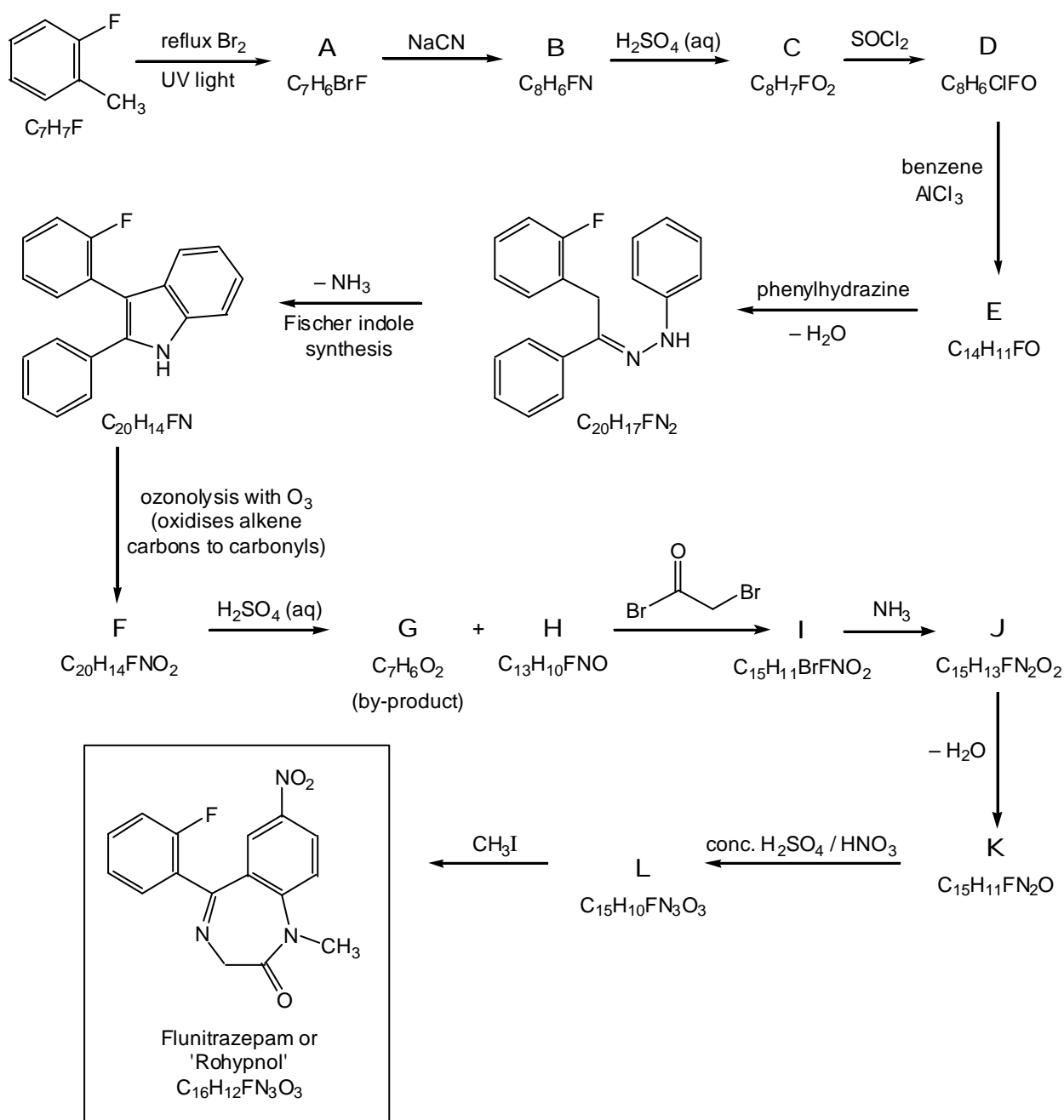
- (a) Draw the structure for hydroxylammonium chloride, $\text{NH}_3\text{OH}^+\text{Cl}^-$. Include on your diagram the approximate values of the bond angles.
- (b) Calculate the ratio of the number of moles of Fe^{3+} ions to the number of moles of hydroxylammonium chloride which have reacted together.
- (c) Calculate the oxidation number of the nitrogen in hydroxylammonium chloride and hence in the product.
- (d) Suggest which of the following is the nitrogen-containing product formed from the hydroxylammonium chloride:
 N_2 , NO , N_2O , N_2O_4 , NH_3 .
- (e) Write a balanced equation for the reaction between hydroxylammonium chloride and iron(III) ions.

7. This question is about the synthesis of Rohypnol

Rohypnol is a trade name for the compound *flunitrazepam* whose structure is shown in the box below. It is a controversial sedative which has been misused to 'spike' people's drinks.



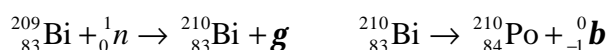
Flunitrazepam was first synthesised from (2-fluoro)-methylbenzene as outlined below.



Draw the structures for the reagent phenylhydrazine and compounds **A** to **L**.

8. This question is about polonium

Polonium is a radioactive group VI element, discovered in 1898 by Marie Curie. It occurs naturally in trace amounts in some uranium ores but is now made by neutron irradiation of ^{209}Bi . This produces short-lived ^{210}Bi which decays to polonium by the emission of a beta-particle (an electron):



Polonium-210 has a half life of 138 days and decays by emitting an alpha particle (a helium nucleus).



- (a) What is the electronic configuration of polonium?
- (b) What nuclide is formed when polonium-210 decays?

Due to its very short half life and the impedance of the alpha-particles it emits, metallic polonium and its compounds are self heating; 1g of metal produces 141 W. This led to its use in Radioisotope Heater Units (RHUs) to keep satellites warm and functioning in space, and in Radioisotope Thermal Generators (RTGs) to produce electrical power. More recently, plutonium-238 has been used instead of polonium. ^{238}Pu has a much longer half-life but produces less power (0.56 W g^{-1}).

- (c) What will be the power output of ^{210}Po after 1 year?
- (d) After 5 years, the power output of ^{238}Pu is approximately 96% of its initial value. Estimate the half life of plutonium-238.

Polonium is unique amongst the elements in being the only one to have a simple cubic structure with each atom lying at the corner of a cube.

- (e) Given that the density of polonium-210 is 9.142 g cm^{-3} , calculate its atomic radius.

[The Avogadro number, $N_A = 6.022 \times 10^{23} \text{ mol}^{-1}$.]